


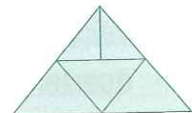

MONDAY

- If the day before yesterday was Monday what day is tomorrow?
- $1.5 + 2.5 =$
- If you rode your bike for 7 km in 30 minutes, how far in an hour?
- Double 49.
- $800 - 230 =$
- Using 7, 4, 9 and 2, make up the largest number possible.
- How many faces are on a pentahedron?
- 0.6, 0.8, , 1.2
- $90 + 70 =$
- How many grams make up 9.5 kg?
☐ 959 g ☐ 9500 g ☐ 950 g
- Tick the pentahedron.
☐ square pyramid ☐ cube
☐ cylinder ☐ pentagon
- $900 + 5 + 80 + 2000 =$
- $1500 - 900 =$
- Can 19 be divided by 3 equally?
- Tick the 2 equivalent fractions.
☐ $\frac{2}{3}$ ☐ $\frac{1}{2}$ ☐ $\frac{4}{6}$ ☐ $\frac{3}{4}$
- Mark as a scalene triangle.
- Draw a $\frac{1}{2}$ turn clockwise.
- $7 - 0.1 =$
- Halve 30.
- $12 \times 4 =$

20

TUESDAY

- The time is
- $0.22 > 2$ ☐ true ☐ false
- Tally 12.
- $500 + 700 + 400 =$
- $\$4.70 - \$1.20 =$
- Round 950 (nearest 100).
- $7 \div 7 =$
- If the time is 4.00, what will the time be in 40 minutes?
- Circle the 2 congruent shapes.
A B C D E F
- $5 + 5 + 5 + 3 =$
- How many triangles can you find?
- 2, 4, 5, 10, 11, , 23
- $100 - 39 =$
- Mark as an isosceles triangle.
- Tick the two odd numbers.
☐ 4 ☐ 7 ☐ 8 ☐ 20 ☐ 10 ☐ 9
- $5 - 0.1 =$
- Take 6 away from 12.
- Draw a vertical line.
- $12 \times 8 =$
- Write ten thousand one hundred and eleven as a numeral.



20

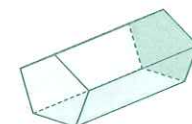
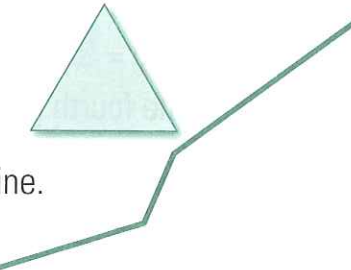
WEDNESDAY

- | |
|---|
| 3 |
| 3 |
| 9 |

3
X
18

3
8
24

 X should be
- $65 + 15 =$
- $170 - 80 =$
- Is a cube a polygon or a polyhedron?
- Halve 94.
- Name this shape.
- What is the cost of a 2 minute mobile phone call at the rate of 55c per 30 seconds.
- Mark as an equilateral triangle.
- Measure this line.
cm
- $2 - 0.1 =$
- 72, 63, 54, 45,
- How many grams make up 10 kg?
☐ 100 g ☐ 1000 g ☐ 10 000 g
- $7 \times 50 =$
- Which position is F in the alphabet?
- Is $\frac{1}{2}$ equivalent to $\frac{3}{6}$?
- $6 + 7000 + 500 + 80 =$
- $3 \times 9 =$
- Name this shape.
- Using 3, 8, 7 and 9 make up the largest possible number.
- Tick the two prime numbers.
☐ 6 ☐ 7 ☐ 9 ☐ 15
☐ 20 ☐ 5 ☐ 12

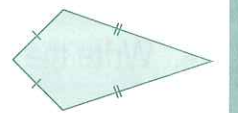
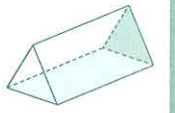


20

THURSDAY

- The time is
- $6 \div 1 =$
- $15 + 9 =$
- XIX (Roman numeral) =
- Draw a reflection.
- Name this shape.
- Is 1.00 greater than 0.01?
☐ true ☐ false
- Using 4, 1, 8 and 2, make up the smallest possible number.
- What is the product of 12 and 9?
- 60, 54, 48, 42,
- It is 7 o'clock in the evening.
Is it ☐ 7.00 am or ☐ 7.00 pm?
- $\$0.65 + \$0.35 =$
- $90 + 3000 + 7 + 400 =$
- $12 - 7 =$
- Name this shape.
- 1 year + 3 months = months
- If the day before yesterday was Thursday, what day will tomorrow be?
- How many kilograms make up 9.4 t?
☐ 94 kg ☐ 9400 kg ☐ 940 kg
- $12 \times 6 =$
- | | | |
|---|---|---|
| 6 | 6 | 6 |
| 6 | 6 | 6 |

 $\frac{6}{6} - \frac{2}{6} = \frac{4}{6} = \frac{2}{3}$



20