

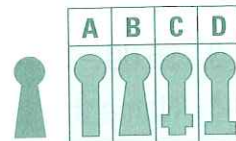
MONDAY

1. What is the time?



2. $3 \times 9 =$

3. Will this shape fit into A, B, C or D?



4. $81 - 10 =$

5. $\$3.75 - 80c =$

6. How many metres are in 2.8 km?

☐ 28 m ☐ 280 m ☐ 2800 m ☐ 208 m

7. Draw a reflection.



8. $2500 + 600 =$

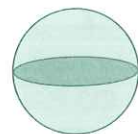
9. $10^2 =$

10. $1 > 0.95$ ☐ true ☐ false

11. If the time is 8.50, what will the time be in 15 minutes?

12. $4 \times 5 =$

13. Name this shape.



14. Write the date one week from 18 May?

15. Draw a $\frac{1}{4}$ turn clockwise.



16. $\frac{8}{10} = 0.1, 0.8$ or 8 ?

17. $500 + 2000 + 10 + 2 =$

18. Is this shape an irregular or a regular hexagon?



19. $12 \times 9 =$

20. + =

TUESDAY

7	3	8
4	9	5
11	X	13

X =

2. $15 + 45 =$

3. $400 + 700 =$

4. $6 \times 9 =$

5. $3.2 \text{ km} =$ ☐ 32 m ☐ 3200 m
☐ 3020 m ☐ 320 m

6. $\$3.50 - 60c =$

7. What is the cost of 4 kg of flour at 50c per 500 g?

8. Draw a pair of parallel lines.

9. Name this 2-D shape.



10. What is the difference between 50 and 8?

11. $1 \text{ cm} =$ mm

12. Write zero point two as a numeral.

13. If you swam 8 laps of a 50 m pool what distance have you covered? m

14. 0.7, 0.8, 0.9,

15. $6 - 0.5 =$

16. What is the place value of the 9 in 9835?

17. $900 + 700 + 100 =$

18. Write the number before 500.

19. $12 - 9 =$

20. This 2-D shape is a



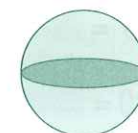
WEDNESDAY

1. What is the time?



2. $13 + 17 =$

3. Name this 3-D shape.



4. Double 37.

5. $8 \times 6 =$

6. $8.7 \text{ m} =$ ☐ 87 cm ☐ 870 cm ☐ 8.7 cm

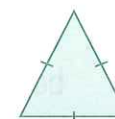
7. A 10-sided polygon is a

8. In 1077, what is the place value of the 0?

☐ 1000 ☐ 100 ☐ 10 ☐ 1

9. $12^2 =$

10. This is a(n)



triangle.

11. $\$4.20 - 35c =$

12. 1, 4, 9, 16, 25, 36,

13. 1992 was a leap year. What was the previous leap year?

14. $12 \times 4 =$

15. $4 - 0.4 =$

16. What is the perimeter of a square with 7 cm sides. cm

17. $6 \times 50 =$

18. A perfume factory can produce 200 bottles every 15 minutes. How many bottles can be made in an hour?

19. Write one symmetrical number.

20. $3000 - 1500 =$



THURSDAY

8	8	8
X	8	9
15	16	17

X =

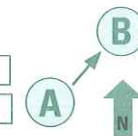
2. $600 + 700 =$

3. Round 148 (nearest 10).

4. What is the sum of 600 and 700?

5. $\$2.30 - 35c =$

6. North-east ☐ North-west ☐
South-east ☐ South-west ☐



What is the direction from A to B?

7. $6 + 5 =$

8. $500 - 270 =$

9. Halve 92.

10. $7 \times 8 =$

11. How many days are in December?

12. Name a month in spring.

13. Write nine thousand four hundred and forty one as a numeral.

14. Tally =

15. What is the cost of 5 kg of watermelon at 20c per 500 g? \$

16. $7 \times 50 =$

17. Name this 2-D shape.



18. Alex and Antonio ate 9 chocolate biscuits altogether. Antonio ate twice as many as Alex. How many biscuits did Antonio eat?

19. $17 - 8 =$

20. 0.2, 0.4, 0.6,

