

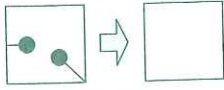






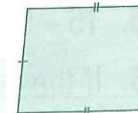






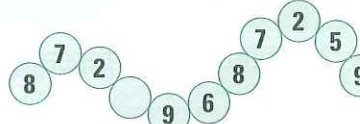
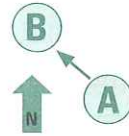


MONDAY

- The time is ten to 
- Halve 50.
- $13 - 9 =$ 
- Shaded area = squares
- $3 \div 3 =$
- $4.1 + 3.2 =$
- How many sides are on a hexagon?
- $\$10.00 - \$5.30 =$
- $\frac{7}{10} = 0.7$ or 0.07 ?
- Write a factor of 28 (besides 1, 2 or 28).
- October is in which season?
- $0.03 > 0.3$ ☐ true ☐ false
- Marty the brickie began work at 6 am and left at 5 pm. If he took $\frac{3}{4}$ of an hour for morning tea and lunch and 15 minutes to clean up how many bricks did he lay if he laid 100 bricks each hour?
- Draw a $\frac{3}{4}$ turn clockwise. 
- $12 + 12 + 12 + 12 =$
- $200 \times 3 =$
- $9 \times 6 =$
- If a street has 15 houses numbered 1 to 15 how many houses will have an odd number?
- $20 - 9 =$
- How many angles are in an octagon? 


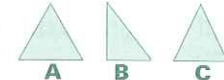


TUESDAY

- What is the time? 
- $10 \overline{)22} =$
- $5781 \times 0 =$
- What is the direction from A to B? 
 - North-east ☐
 - South-east ☐
 - North-west ☐
 - South-west ☐
- $54 - 5 =$
- Write three point zero three.
- $0.08 > 0.8$ ☐ true ☐ false
- Shaded area = squares 
- $420 + 180 =$
- $0.3 + 0.7 =$
- Mark as an isosceles triangle. 
- A soft drink factory is able to produce 200 cans each minute. How many cans are produced in 10 minutes?
- What shape will you see in the cross-section? 
- $2.3 + 1.5 =$
- $3\frac{1}{2}$ cm = mm
- Name this 2-D shape. 
- Measure this line.  cm
- $0.2 = \frac{2}{10}$ or 2?
- $400 \times 2 =$
- What is the sum of 80 and 4? 

WEDNESDAY

- The time is ten to 
- $\$0.40 + \$0.60 =$
- If you share 24 strawberries with 3 students, how many each?
- Is N symmetrical?
- A cheese factory produces 50 blocks of cheese every two minutes. How many blocks of cheese are made after 10 minutes?
- Draw a mirror image (reflection). 
- $300 - 60 =$
- Complete the pattern. 
- Tick the direction from A to B. 
 - North-east ☐
 - North-west ☐
 - South-east ☐
 - South-west ☐
- Can 32 be divided by 3 equally?
- Mark as an equilateral triangle. 
- $19 \div 6 =$ r
- $8.8 - 4.3 =$
- $6 \times 5 =$
- $0.4 + 4 =$
- Write eight thousand and eighty-eight as a numeral.
- $50 \times 4 =$
- How many days are in September?
- What is the sum of 5.1 and 5.9?
- $300 - 30 =$ 

THURSDAY

- What is the time? 
- Which triangle has a right-angle? 
- $4 < 4.4$ ☐ true ☐ false
- $6.4 - 4.1 =$
- $10^2 =$
- $1 = \frac{1}{10}, \frac{1}{100}$ or $\frac{1}{1}$?
- 95 mm = cm
- Write a factor of 27 (besides 1 or 27).
- $27 + 23 =$
- What shape will you see in the cross-section? 
- What is the date a week after 27 March?
- $250 - 150 =$
- $0.9 - 0.4 =$
- How many angles are in a parallelogram?
- $60 \times 5 =$
- $13.5 - 3.2 =$
- Draw a reflection. 
- A tyre factory produces a set of four tyres every 5 minutes. After half an hour how many tyres are made?
- $\$6.40 + \$1.60 =$
- $0.5 + 0.5 =$ 