

MONDAY

- The time is twenty-five to
- What is the sum of 50 and 20?
- $70 - 40 =$
- $21 > 23$ ☐ true ☐ false
- $300 - 60 =$
- Name this 3-D shape.



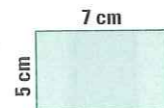
- $5 \overline{)55} =$
- Is **H** symmetrical?
- $6^2 =$ \times $=$
- Complete the last two dots in this pattern.
- $150 - 90 =$
- $50 \times 4 =$
- What is the ordinal position of J?
E, H, T, J, C



- $V + V$ (Roman numerals) $=$
- Measure this line. cm



- $1 \text{ km} =$ m
- The month of February is in which season?
- Perimeter $=$ cm
- Alex caught 15 fish and gave 7 to Antonio and 4 to Kieren. How many fish has Alex got left?
- Is this a polygon?



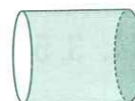
TUESDAY

- The time is twenty-five to
- $80 + 60 =$
- Will this shape tessellate?
- Share 12 blocks of chocolate with 4 people. each



- $45 \div 9 =$ so $9 \times$ $= 45$ 5 Ends in a 5 is a clue!
- Write one hundred and ninety as a numeral.
- $5^2 =$ \times $=$
- How many days are in February (in a leap year)?
- $15 \div 3 =$
- Which holds more water?
☐ 1 L bucket
☐ 100 mL bucket
- What is the difference between 19 and 8?

- Name this 3-D shape.



- A decade $=$ years
- Round 842 (nearest 10).
- Draw a line of symmetry.
- Write a composite number between 10 and 20.
- In 569, the meaning of 6 is
- $1 \text{ kg} =$ g
- $120 - 50 =$
- $8 \times 7 =$



WEDNESDAY

- The time is twenty-five to
- $3^2 =$ \times $=$
- $50 + 90 =$
- How many seconds are in 3 minutes?
- $10 \text{ m} =$ cm
- How many faces are on a cone?



- Double 45.
- $35 + 45 =$
- Shade $\frac{3}{5}$. ☐ ☐ ☐ ☐ ☐
- If you had 18 cans of cool drink and you shared them into 6 boxes how many cans would be in each box?

- $3 \text{ m} =$ cm

- $\$10.00 - \$6.50 =$

- Draw a line of symmetry.

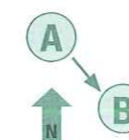


- $4 \overline{)84} =$

- Halve 28.

- $120 - 80 =$

- Tick the direction from A to B.



- | | |
|------------|--------------------------|
| North-east | <input type="checkbox"/> |
| South-east | <input type="checkbox"/> |
| North-west | <input type="checkbox"/> |
| South-west | <input type="checkbox"/> |

- Write the number sentence for Question 10.


- $150 + 50 =$

- Name this polygon.



THURSDAY

- The time is twenty-five to
- $9^2 =$ \times $=$
- $7 + 8 =$
- How many faces are on a cylinder?
- $140 - 80 =$
- Name this 2-D shape.



- $100 \div 10 =$
- A pentagon has sides.
- What is the product of 6 and 4?
- What is the difference between 15 and 9?

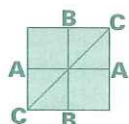
- $8 \overline{)80} =$

- How many hours are in 2 days?

- $60 \times 2 =$

- $\$5.00 - \$1.50 =$

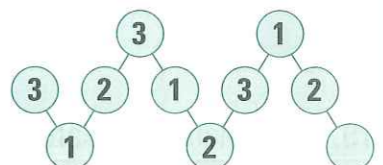
- Use a colour to trace over the vertical line.



- Write an odd number.

- $8 + 5 + 4 =$
- If you used 3 eggs from a dozen how many eggs are left?

- Complete the sequence.



- If Toto's mobile phone costs 35c for every 30 seconds what is the cost for a minute?

