
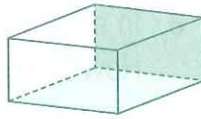







MONDAY

- The time is five past 
- $12 - 5 =$
- $5^2 = 5 \times 5 =$
- Name this 3-D shape. 
rec
p * m
- How many days are in October?
- $21 \div 3 =$ so $3 \times = 21$
- There were 30 golf balls in a bucket. Five golfers wanted to share the golf balls. How many do they each get?
- 1 cm = mm
- Is sunset am or pm?
- Is 4 pm morning or afternoon?
- Write the number sentence for Question 7.
 $\div =$ 
- $4 \times 4 =$ Same as $4 + 4 + 4 + 4$
- $4 + 8 =$
- $28 + 10 =$
- VII (Roman numeral) =
- 25, 45, 65,
- A quadrilateral has sides.
- A pentagon has corners.
- Round 143 to the nearest ten.
- An octagon has sides.



20

TUESDAY

- The time is five past 
- Share 12 pieces of chocolate among 6 smiling children.
pieces each
- $6 \times 3 =$
- Jakob watched three hours of TV on Monday and six hours on Wednesday. How many hours did he watch altogether?
- $19 - 10 =$
- $24 + 10 =$
- Is 17 odd or even?
- $77 \div 11 =$ so $11 \times = 77$
- $1000 - 300 =$
- IX (Roman numeral) =
- $40 + 80 =$
- 1 m = cm
- 
How long is line AB? cm
- $4 \times 200 =$
- Name this 2-D shape. 
- How many days are in a fortnight?
- How many weeks are in a year?
- In 395, what is the meaning of the 5?
☐ 500 ☐ 50 ☐ 5
- Is this horizontal or vertical? 
- A hexagon has sides.





20

WEDNESDAY

- The time is five past 
- $16 \div 8 =$ so $8 \times = 16$
- Would you ask for a kilogram or a kilometre of steak?
- $200 + 800 =$
- Round 43 to the nearest ten.
- An octagon is a 2-D, -sided polygon.
- Which is longer, 1 cm or 1 m?
- How many days are in November?
- Is coffee sold by the gram or by the centimetre?
- Emilie picked 12 tomatoes from her garden. She gave her brother Jakob 4. How many tomatoes does Emilie have left?
- Write the number sentence for Question 10.
 $- =$
- Name this 3-D shape. 
c
- XII (Roman numeral) =
- $3 \times 9 =$
- Write two hundred and twenty-eight as numeral.
- $6 + 7 =$
- $140 - 40 =$
- Is 22 odd or even?
- $19 - 4 =$
- $60 + 30 + 30 =$

20

THURSDAY

- The time is five past 
- $6 - 3 =$
- $11 + 11 + 11 + 11 + 11 =$
- $31 + 10 =$
- Which months are in summer?
☐ December, January, February
☐ January, February, March
- $10 \div 1 =$
- Name this 3-D shape 
c d
- $4 \times 6 =$ Same as $6 + 6 + 6 + 6$
- $18 \div 2 =$
- Round 121 to the nearest ten.
- $3 \times 30 =$
- $29 - 10 =$
- Is milk sold in litres or metres?
- Name this 2-D shape. 
- $9 + 6 =$
- $50 + 70 =$
- $40 \div 10 =$
- Which direction is this? 
☐ clockwise ☐ anticlockwise
- How many days are in a year?
- How many days are in January?

20