


















# MONDAY



- What is the time?
- What are 8 lots of 2 ( $8 \times 2$ )? =
- $5 \times 4 = 4 + \quad + \quad + \quad + \quad =$
- $6 + 3 =$
- Jakob had 16 lollies and placed them in four equal groups. How many lollies in each group?  
 $16 \div 4 =$
- $15 \div 5 =$
- Double 20.
- Halve 60.
- Is 15 odd or even?
- A square has 4 equal sides.  
☐ true ☐ false
- Name this shape. 
- $3 \text{ cm} =$  ☐ 10 mm ☐ 20 mm  
☐ 30 mm ☐ 40 mm
- Measure the line AB.  cm
- Summer, autumn, winter and  are the four seasons.
- How many days are in a year?
- How many weeks are in a year?
- $27 - 10 =$
- Write one hundred and sixty-seven as a numeral.
- 6 pairs of shoes =  shoes
- $68 + 10 =$  






# TUESDAY



- What is the time?
- $6 \times 2 = 2 + \quad + \quad + \quad + \quad =$
- $8 \times 1 =$
- $4 + 5 =$
- Lisa wanted to equally share 15 pieces of chocolate with three of her friends. How many pieces for each friend?  

- $30 \div 3 =$
- $8 - 4 =$
- $24 - 10 =$
- Will this shape fit into A, B or C?  
   
- Is 2 odd or even?
- Measure the line AB.  cm
- $10 \text{ mm} =$   cm
- Name this shape. 
- Name this shape. 
- Halve 22.
- Double 7.
-  seconds = one minute
- How many hours are in a day?
- $7 - 3 =$  
- $100 \text{ cm} =$   m





# WEDNESDAY



- What is the time?
- $7 - 1 =$
- $97 - 10 =$
- If you eat 2 eggs from a dozen. How many are left?
- $5 \times 3 = 3 + \quad + \quad + \quad + \quad =$
- Emilie had 4 groups of flower petals each with 3 petals. How many petals in total?  
 So  $4 \times \quad = 40$
- $9 \div 3 =$   
 So  $3 \times \quad = 9$
- $5 + 6 =$
- $3 + 7 =$
- Write one hundred and seventy-nine as a numeral.
- Is 7 odd or even?
- Is a square a quadrilateral?
- A pentagon has  sides.
- What shape has 3 sides?
- Double 6.
- $38 + 10 =$
- How many days are in a fortnight?
-  minutes = 1 hour 

# THURSDAY



- What is the time?
- $10 + 27 =$
- Halve 20.
- Is 15 odd or even?
- How many days are in a leap year?
- How many days are in a week?
- $93 - 10 =$
- $24 - 10 =$
- $3 \times 5 = 5 + \quad + \quad =$
- Lucy had 6 groups of shells with 3 in each group. How many shells are there?  
 So  $\quad \times \quad =$
- $90 \div 9 =$
- $6 \div 3 =$
- A hexagon has  sides.
- Which 2-D shape has 5 sides?  
☐ pentagon ☐ hexagon ☐ square
- $2 + 9 =$
- If you break 5 eggs out of a dozen. How many are left?
- Shade the left arrow.  

- $10 - 4 =$
- Measure the line AB with your ruler.  cm
- $300 + 50 + 2 =$  